



Bipin Nambiar
(SBI PO 2018)



Shiraz Khan
(SBI Clerk 2018)



Kuldeep Yadav
(SBI PO 2018)



Rajat Saxena
(IBPS Clerk 2018)



Anupam Tyagi
(IBPS PO 2018)

FRIENDS!
WE USED **TESTZONE**
AND CRACKED BANK EXAMS

बैंक परीक्षाओं के लिए निश्चित
रूप से सर्वश्रेष्ठ मॉक
टेस्ट सीरीज

IT'S YOUR TURN NOW
TAKE A **FREE** MOCK TEST



Smartkeeda
The Question Bank

Mixed Math Questions for SSC 10+2, CGL Tier-I and CGL Tier - II

SSC Math's Quiz 7

Directions: Read the following questions carefully and choose the right answer.

1. If $\sin \alpha + (\sin \alpha)^2 = 1$,

then the value of

$$(\cos \alpha)^{12} + 3(\cos \alpha)^{10} + 3(\cos \alpha)^8 + (\cos \alpha)^6 - 1$$
 is

- A. 0
- B. 1
- C. -1
- D. 2

2. One flies a kite with a thread 180 meter long. If the thread of the kite makes an angle of 60° with the horizontal line, then the height of the kite from the ground (assuming thread to be in straight line) is

A. 50 meter

B. $90\sqrt{3}$ meter

C. $75\sqrt{3}$ meter

D. 90 meter

3. If $a + b + c = 0$ then the value of

$$\frac{a^2}{a^2 - bc} + \frac{b^2}{b^2 - ca} + \frac{c^2}{c^2 - ab}$$
 is:

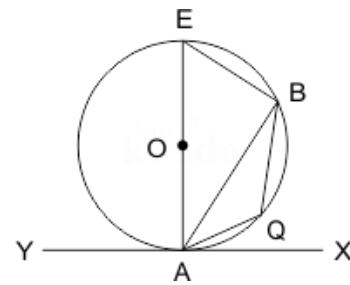
- A. 4
- B. 2
- C. 1
- D. 0

4. Three cubes of metal whose edges are in the ratio 3 : 4 : 5, are melted and one cube is formed. If the diagonal of the cube is $12\sqrt{3}$ cm, then find the edge of the largest among three cubes.

A. 15 cm
B. 12.5 cm
C. 17.5 cm
D. 10 cm

5. In the figure given below, YAX is a tangent to the circle with center O. If $\angle BAX = 70^\circ$ and $\angle BAQ = 40^\circ$, then what is $\angle ABQ$ equal to

A. 20°
B. 30°
C. 35°
D. 40°



6. In an examination the marks of Anil was 28.57% less than that of Barun's marks and Barun's marks was 11.11% less than that of Chandan's marks. If the difference between the marks obtained by Anil and Chandan is 80.5 then find the marks obtained by Barun?

A. 196
B. 225.5
C. 140
D. 184

7. Rohan borrowed some money at 10% per annum for first 6 years, 5% per annum for next three years 13% per annum for the period after 9 years. If the interest paid by him at the end of 12 year is Rs 22800, then find how much did he borrowed.

A. 30000
B. 25000
C. 20000
D. 35000

8. A shop of electronic goods remains closed on Monday. The average sales per day for remaining six days of a week is Rs. 13240 & the average sale of Tuesday to Saturday is Rs. 13924. The sales on Sunday is:
- A. Rs. 2379
 - B. Rs. 201888
 - C. Rs. 21704
 - D. None of these
9. A pump can be used for filling as well emptying a tank. The capacity of the tank is 2400 m^3 . The emptying tank capacity is 10 m^3 per minute higher than its filling capacity and the pump needs 8 minutes lesser to empty the tank than it needs to fill it. What is the filling capacity of the pump?
- A. $60 \text{ m}^3/\text{min}$
 - B. $70 \text{ m}^3/\text{min}$
 - C. $50 \text{ m}^3/\text{min}$
 - D. None of these
10. The length of the sides of a triangle are 9 cm, 12 cm and 15 cm. Find the length of the perpendicular from the opposite vertex to the side whose length is 15 cm.
- A. 4.8 cm
 - B. 6.4 cm
 - C. 7.2 cm
 - D. 6.8 cm



SSC CGL 2019

FREE MOCK TEST [Attempt Now](#)

- ✓ EXCELLENT CONTENT
- ✓ BRILLIANT TEST ANALYSIS
- ✓ UNMATCHED EXPLANATION

Explanation:

1. $\sin \alpha + (\sin \alpha)^2 = 1$

$$\Rightarrow \sin \alpha = 1 - (\sin \alpha)^2$$

$$\Rightarrow \sin \alpha = (\cos \alpha)^2$$

According to the question,

$$\text{we have } (\cos \alpha)^{12} + 3(\cos \alpha)^{10} + 3(\cos \alpha)^8 + (\cos \alpha)^6 - 1$$

$$\Rightarrow ((\cos \alpha)^4 + (\cos \alpha)^2)^3 - 1$$

$$\Rightarrow ((\sin \alpha)^2 + (\cos \alpha)^2)^3 - 1 = 1 - 1 = 0$$

Hence, option A is correct.

2. AB = length of thread = 180 meter

$$\angle PQR = 60^\circ$$

In ΔPQR

$$\sin 60^\circ = \frac{PR}{PQ} = \frac{\sqrt{3}}{2} = \frac{PR}{180}$$

$$\text{so, } \frac{PR}{180} = \frac{\sqrt{3}}{2}$$

$$PR = 180 \times \frac{\sqrt{3}}{2} = 90\sqrt{3}$$

Hence, option B is correct.



3. $a + b + c = 0$ $a = -b - c$ or $a^2 = (b + c)^2$ Therefore given expression,

$$\frac{a^2}{a^2 - bc} + \frac{b^2}{b^2 - ca} + \frac{c^2}{c^2 - ab}$$

$$= \frac{(b + c)^2}{(b + c)^2 - bc} + \frac{b^2}{b^2 + c(b + c)} + \frac{c^2}{c^2 + b(b + c)}$$

$$= \frac{(b+c)^2}{(b^2+c^2+bc)} + \frac{b^2}{b^2+c^2+bc} + \frac{c^2}{b^2+c^2+bc}$$

$$= \frac{b^2+c^2+2bc+b^2+c^2}{b^2+c^2+bc}$$

$$= 2 \frac{b^2+c^2+bc}{b^2+c^2+bc}$$

$$= 2$$

Hence, option (B) is correct.

4. Let the edges of the cubes be $3x$, $4x$ and $5x$ cm

We know that diagonal of a cube with side 'a' = $a\sqrt{3}$

$$\text{Side of the new cube} = \frac{12\sqrt{3}}{\sqrt{3}} = 12$$

Therefore equating volumes we get, $(3x)^3 + (4x)^3 + (5x)^3 = 12^3 (27 + 64 + 125) \times$

$$x^3 = 1728$$

$$x^3 = \frac{1728}{216} = 8$$

$x = 2$ So the edge of the largest cube will be $5 \times 2 = 10$ cm

Hence, option (D) is correct.

5. $\angle ABE = 90^\circ$

(Semicircle Angle)

$$\angle BAX = 70^\circ$$

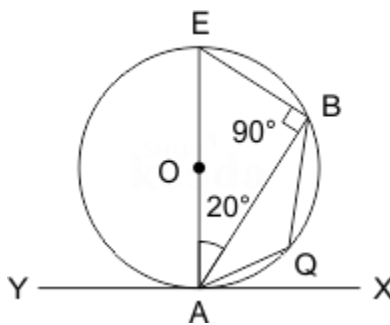
$$\angle EAB = 20^\circ$$

In $\triangle ABE$

$$\angle AEB = 180^\circ - (90^\circ + 20^\circ) = 70^\circ$$

$$\angle BQA = 180^\circ - 70^\circ = 110^\circ$$

(Cyclic quadrilateral)



$$\angle BAQ = 40^\circ \text{ (Given)}$$

$$\text{So, } \angle ABQ = 180^\circ - (110^\circ + 40^\circ)$$

$$\angle ABQ = 30^\circ$$

Hence, option B is correct.

6. Let Barun's marks = B, Anil's marks = A and Chandan's marks = C

According to question:

$$A = 28.57\% \text{ less than } B = 71.43\% \text{ of } B \text{ (we know that } 1/7 = 14.28\% \text{ approximately)}$$

$$\text{So, } A = \frac{5}{7} \times B$$

$$A : B = 5 : 7 \text{ ----(I)}$$

$$\text{And } B = 11.11\% \text{ less than } C, B = (8/9) \times C$$

$$B : C = 8 : 9 \text{ -----(II)}$$

$$A : B : C = 40 : 56 : 63$$

$$A = 40X$$

$$B = 56X$$

$$C = 63X$$

$$\text{According to question, } C - A = 23X = 80.5$$

$$\text{So, the value of } x = 3.5$$

$$\text{Now the marks obtained by Barun} = 56x = 56 \times 3.5 = 196$$

Hence, option A is correct.

7. Let x be the amount borrowed by Rohan

Therefore, according to question

$$\frac{x \times 10 \times 6}{100} + \frac{x \times 5 \times 3}{100} + \frac{x \times 13 \times 3}{100} = 22800$$

Solving above equation we get,

$$\frac{114x}{100} = 22800$$



$$x = 20000$$

Hence, option C is the correct.

8. Tuesday to Sunday = Rs. $13240 \times 6 = \text{Rs.}79440$

Tuesday to Saturday = $13924 \times 5 = \text{Rs.}69620$

Sale on Sunday = $79440 - 69620 = \text{Rs.}9820$

Hence, option D is correct.

9. Let the filling capacity be $x \text{ m}^3$

Emptying capacity = $x + 10$

According to the question,

$$\Rightarrow \frac{2400}{x} - \frac{2400}{x+10} = 8$$

$$\Rightarrow \frac{x+10-x}{(x+10)x} = \frac{1}{300}$$

$$\Rightarrow 3000 = x(x+10)$$

Alternate Method:

Using option C,

$$50 \times 60 = 3000 \text{ satisfies}$$

Hence, option C is correct.

10. Lengths of the sides of a triangle are 9 cm, 12 cm and 15 cm

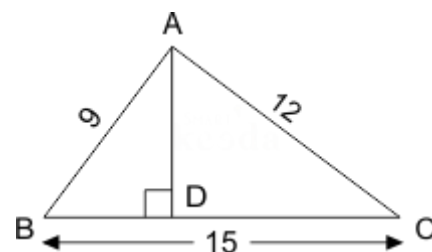
$$\therefore 9^2 + 12^2 = 15^2$$

\therefore This is right angled triangle

$\therefore \Delta ABC$ and ΔADC are similar triangles

$$\text{Then, } AD = \frac{AB \times AC}{BC} = \frac{9 \times 12}{15} = 7.2 \text{ cm}$$

Hence, option C is correct.





SSC CGL 2019

FREE MOCK TEST [Attempt Now](#)

- ✓ EXCELLENT CONTENT
- ✓ BRILLIANT TEST ANALYSIS
- ✓ UNMATCHED EXPLANATION

For more PDFs join
us on Telegram

[CLICK HERE](#)



SBI | RBI | IBPS | RRB | SSC | NIACL | EPFO | UGC NET | LIC | RAILWAY | CLAT | RJS



Smartkeeda

The Question Bank



SmartKeeda

The Question Bank

Presents

TestZone

India's least priced Test Series platform



ALL BANK EXAMS

2019-20 Test Series

@ Just

₹ 499/-

300+ Full Length Tests

- Brilliant Test Analysis
- Excellent Content
- Unmatched Explanations

JOIN NOW