



Bipin Nambiar
(SBI PO 2018)



Shiraz Khan
(SBI Clerk 2018)



Kuldeep Yadav
(SBI PO 2018)



Rajat Saxena
(IBPS Clerk 2018)



Anupam Tyagi
(IBPS PO 2018)

FRIENDS!
WE USED **TESTZONE**
AND CRACKED BANK EXAMS

बैंक परीक्षाओ के लिए निश्चित
रूप से सर्वश्रेष्ठ मॉक
टेस्ट सीरीज

IT'S YOUR TURN NOW
TAKE A **FREE** MOCK TEST



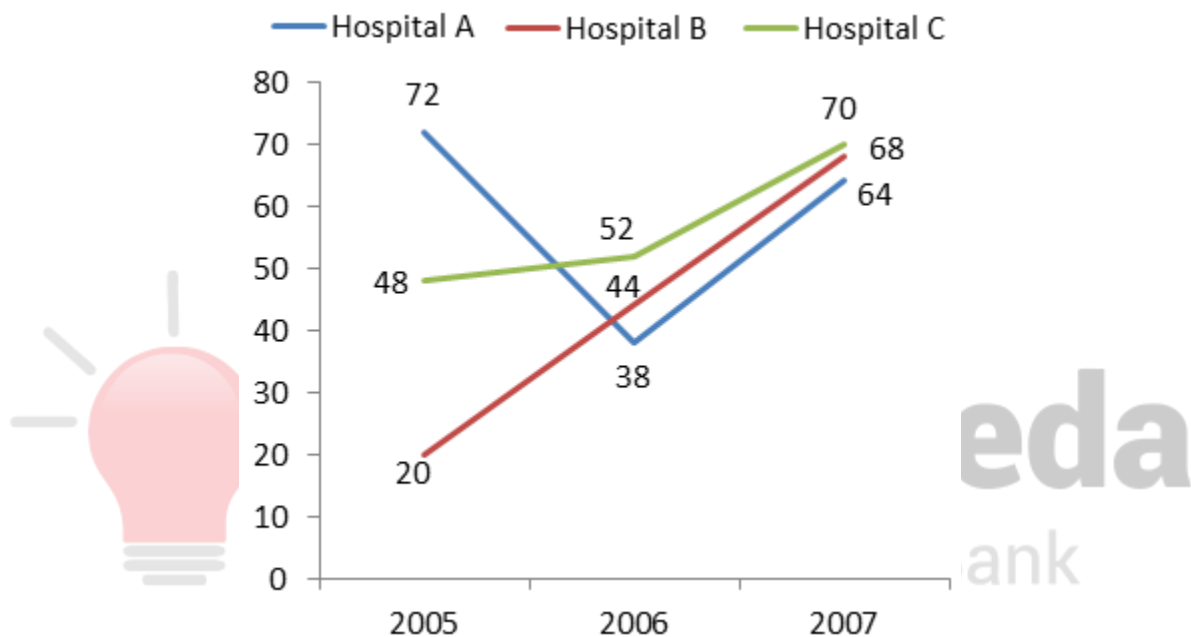
Smartkeeda
The Question Bank

DI Line Chart Questions for SBI Clerk Pre, IBPS Clerk Pre, LIC Assistant Pre and IBPS RRB Assistant Pre Exams.

DI Line Chart No 41

Directions : Study the following line chart carefully and answer the questions given beside.

Given here is a line graph that provides information about number of doctors in different hospital during different years.



- 1. What is the ratio of total number of doctors in the 3 hospitals combined in 2007 to the total number of doctors in the 3 hospitals combined in 2005?**
A. 101 : 70 B. 13 : 5 C. 109 : 76 D. 80 : 71 E. 43 : 35
- 2. The number of doctors in hospital B in 2006 was what percentage of the total number of doctors in hospital B during the 3 years combined?**
A. 50% B. 16.67% C. 42.5% D. 33.33% E. 12.5%
- 3. What was the difference between the number of doctors in hospital A and hospital C in 2007?**
A. 2 B. 12 C. 20 D. 6 E. 18


4. What was the average number of doctors in hospital A during the period 2005 to 2007?

- A. 18 B. 26 C. 58 D. 46 E. None of these

5. What was the total number of doctors in the 3 hospitals in the 3 years combined?

- A. 476 B. 608 C. 310 D. 340 E. None of these

Correct Answers:



1	2	3	4	5
A	D	D	C	A



Explanations :

1. The total number of doctors in the 3 hospitals combined in 2007 = $64 + 68 + 70 = 202$

The total number of doctors in the 3 hospitals combined in 2005 = $72 + 20 + 48 = 140$

Required ratio = $202 : 140 = 101 : 70$

Hence, option A is correct.

2.

$$\text{Reqd. \%} = \frac{44}{20 + 44 + 68} \times 100 = 33.33\%$$

Hence, option D is correct.

3. Required difference = $(70 - 64) = 6$

Hence, option D is correct.

4.

$$\text{Reqd. average} = \frac{72 + 38 + 64}{3} = \frac{174}{3} = 58$$

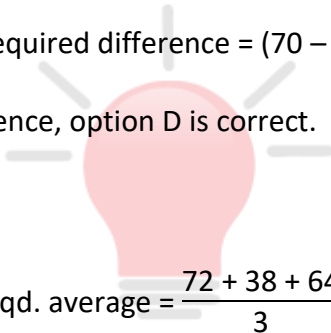
Hence, option C is correct.

5. The total number of doctors in the 3 hospitals in the 3 years combined

$$= (72 + 38 + 64) + (20 + 44 + 68) + (48 + 52 + 70)$$

$$= 174 + 132 + 170 = 476$$

Hence, option A is correct.



Smartkeeda

The Question Bank





SmartKeeda

The Question Bank

Presents

TestZone

India's least priced Test Series platform

JOIN

ALL BANK EXAMS

2020-2021 Test Series

@ Just

₹ **599/-**

300+ Full Length Tests

- Brilliant Test Analysis
- Excellent Content
- Unmatched Explanations

JOIN NOW