



Smartkeeda
The Question Bank

TESTZONE

बैंक परीक्षाओं के लिए
निश्चित रूप से
सर्वश्रेष्ठ टेस्ट सीरीज



Kriti Advani
IBPS PO 2020, Clerk, RRB Clerk



Kola Murali Krishna Sai
SBI PO & IBPS PO 2020



Abhishek Raj
IBPS PO & RRB PO 2020



Rahul Jha
All IBPS 2020 Exams



Nimish Mishra
IBPS RRB PO & IBPS Clerk 2020



Subha Saha
IBPS PO & IBPS CLERK 2020

IT'S YOUR
TURN NOW
TAKE A FREE
MOCK TEST

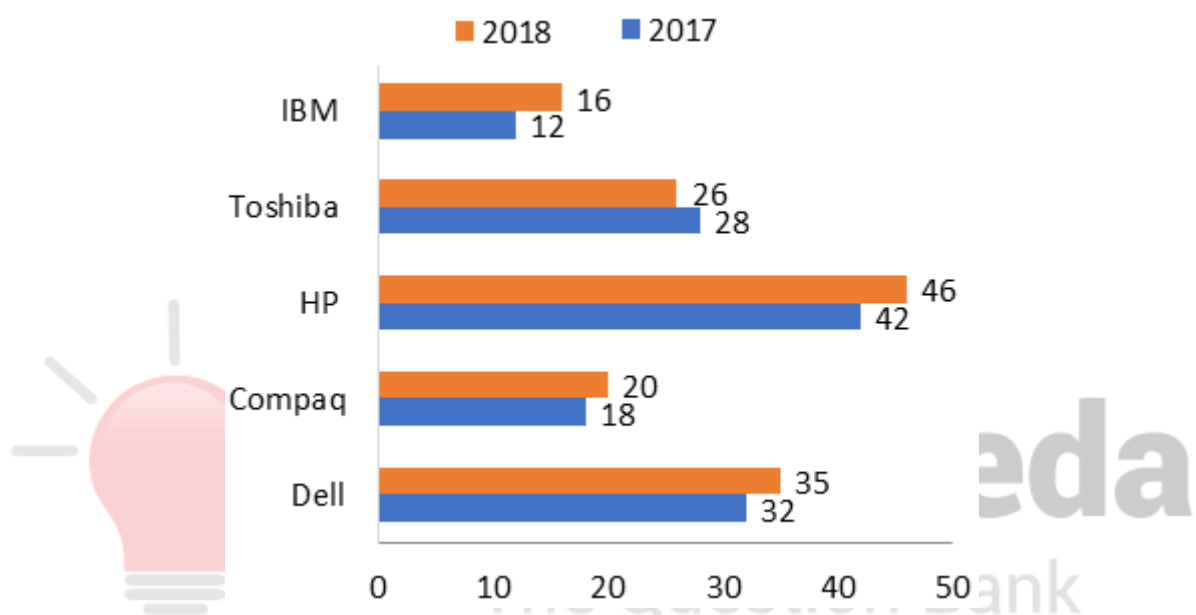
“ **Friends!**
We used **TESTZONE**
And Cracked Bank Exams
”

DI Mixed Chart Questions for SBI PO Pre, IBPS PO Pre, SBI Clerk Mains, IBPS Clerk Mains and IBPS RRB Scale I Pre Exams.

DI Mixed Chart No.85

Directions : Study the following bar and table chart carefully and answer the questions given beside.

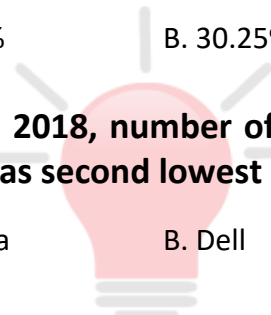
The bar graph given below gives the information about the number (in lakhs) of personal computers sold worldwide in 2017 and 2018.



The table given below gives the information about the percentage of personal computers sold in India over the total number of personal computers sold worldwide.

Company/Year	2017	2018
Dell	20%	18%
Compaq	15%	12%
HP	26%	30%
Toshiba	8%	7%
IBM	9%	12%

1. Of all the five companies together, the total number of personal computers sold in India in 2018 was how many more than that of 2017?
 A. 3 lakhs B. 3.1 lakhs C. 2.9 lakhs D. 2.7 lakhs E. None of these
2. In 2017 and 2018 together, the number of Toshiba personal computers sold in worldwide except India was how much more than that of IBM personal computers sold in worldwide except India?
 A. 26.84 lakhs B. 24.94 lakhs C. 22.82 lakhs D. 18.24 lakhs E. None of these
3. In 2017 and 2018 together, the number of Dell personal computers sold in India was how much less than that of HP personal computers sold in India?
 A. 12.02 lakhs B. 12.12 lakhs C. 13.42 lakhs D. 14.62 lakhs E. None of these
4. From 2017 to 2018, what was the percentage decrease in sales of Toshiba personal computers in India?
 A. 24.25% B. 30.25% C. 18.75% D. 17.75% E. None of these
5. In 2018, number of personal computers sold by which of the following companies was second lowest in India?
 A. Toshiba B. Dell C. HP D. Compaq E. IBM



Smartkeeda
The Question Bank

Correct Answers:

1	2	3	4	5
C	B	A	C	E

Common explanations :


Company/Year	In 2017 (in lakhs)	In 2018 (in lakhs)
Dell	20% of 32 = 6.4	18% of 35 = 6.3
Compaq	15% of 18 = 2.7	12% of 20 = 2.4
HP	26% of 42 = 10.92	30% of 46 = 13.8
Toshiba	8% of 28 = 2.24	7% of 26 = 1.82
IBM	9% of 12 = 1.08	12% of 16 = 1.92
Total	23.34	26.24



Smartkeeda
The Question Bank

www.smartkeeda.com | testzone.smartkeeda.com

SBI | RBI | IBPS | RRB | SSC | NIACL | EPFO | UGC NET | LIC | Railways | CLAT | RJS



Answers:

1. Following the common explanation, we get

The required difference = $26.24 - 23.34 = 2.9$ lakhs

Hence, option C is correct.

2. Following the common explanation, we get

In 2017 and 2018 together, the number of Toshiba personal computers sold in worldwide except India = $28 + 26 - 2.24 - 1.82 = 49.94$ lakhs

The number of IBM personal computers sold in worldwide except India = $12 + 16 - 1.08 - 1.92 = 25$ lakhs

The required difference = $49.94 - 25 = 24.94$ lakhs

Hence, option B is correct.

3. Following the common explanation, we get

In 2017 and 2018 together, the number of Dell personal computers sold in India = $6.4 + 6.3 = 12.7$ lakhs

The number of HP computers sold in India = $10.92 + 13.8 = 24.72$ lakhs

The required difference = $24.72 - 12.7 = 12.02$ lakhs

Hence, option A is correct.

4. Following the common explanation, we get

In 2017, the total sales of Toshiba computers in India = 2.24 lakhs

In 2018, the total sales of Toshiba computers in India = 1.82 lakhs

The reqd. % decrease = $\frac{(2.24 - 1.82) \times 100}{2.24} = \frac{42}{2.24} = 18.75\%$

Hence, option C is correct.

5. Following the common explanation, we get

From the above table, it is clear that number of personal computers sold by IBM was the second lowest in India.

Hence, option E is correct.



Smartkeeda
The Question Bank

Presents

TESTZONE

India's least priced Test Series Platform

JOIN

All Bank Exams

2020-2021 Test Series

@ Just

599/-

400+ Mock Tests

- ✓ Brilliant Test Analysis
- ✓ Excellent Content
- ✓ Unmatched Explanations

JOIN NOW