



SmartKeeda

The Question Bank

Presents

TestZone

India's least priced Test Series platform

JOIN

12 Month Plan

2017-18 All Test Series

@ Just

₹ 399/-

300+ Full Length Tests

- Brilliant Test Analysis
- Excellent Content
- Unmatched Explanations

JOIN NOW

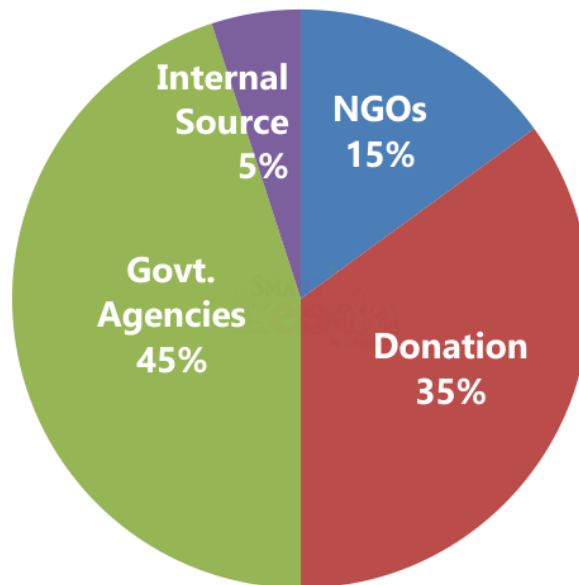
Date Interpretation Pie Chart Questions for Bank Clerk Mains Exams.

DI Pie Chart Quiz 12

Directions: Study the following graph carefully & answer the questions given below it.

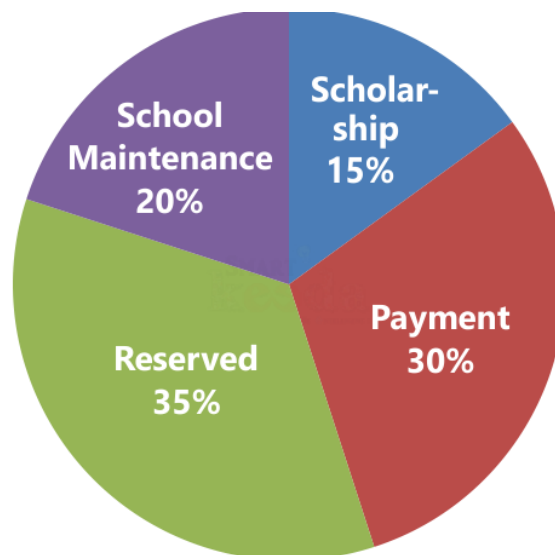
The entire fund that a school gets from different sources is equal to Rs. 500 lakhs

Chart I



Sources of Funds in the School

Chart II



Uses of Funds by the School

1. What is the difference between the funds acquired by the school from NGO's and that from internal sources?

- A. Rs. 50 lakhs B. Rs. 45 lakhs C. Rs. 75 lakhs D. Rs. 25 lakhs E. None of these

2. If the school managed 'school maintenance' from the 'government agencies' fund only, how much fund from government agencies would still be left for other use?

- A. Rs. 120 lakhs B. Rs. 150 lakhs C. Rs. 110 lakhs D. Rs. 95 lakhs E. None of these

3. If scholarship has to be paid out of the donation fund, what is the approximate percentage of donation fund used for this purpose?

- A. 43% B. 47% C. 37% D. 53% E. 32%

4. What is the total amount used by the school for payment?

- A. Rs. 100 lakhs B. Rs. 110 lakhs C. Rs. 150 lakhs D. Rs. 140 lakhs E. None of these



SmartKeeda
The Question Bank

Correct Answers:

1	2	3	4
A	E	A	C

Explanations:

1.

$$\text{Required difference} = \frac{500 \times (15 - 5)}{100} = 50 \text{ lakh}$$

Hence, option A is correct.

2.

$$\begin{aligned} \text{Required amount} &= (45\% - 20\%) \text{ of } 500 \\ &= 25\% \text{ of } 500 = 125 \text{ lakh} \end{aligned}$$

Hence, option E is correct.

3.

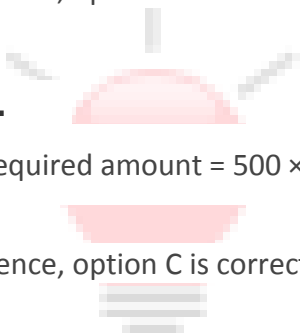
$$\text{Approx. percent} = \frac{15}{35} \times 100 = 43\%$$

Hence, option A is correct.

4.

$$\text{Required amount} = 500 \times \frac{30}{100} = 150 \text{ lakhs}$$

Hence, option C is correct.





SmartKeeda

The Question Bank

प्रस्तुत करते हैं

TestZone

भारत की सबसे किरफायती टेस्ट सीरीज़

अभी
जुड़ें

12 Month Plan

2017-18 All Test Series

@ Just

₹ 399/-

300+ फुल लेन्थ टेस्ट

- श्रेष्ठ विश्लेषण
- उत्कृष्ट विषय सामग्री
- बेजोड़ व्याख्या

अभी जुड़ें