



# SmartKeeda

The Question Bank

Presents

## TestZone

India's least priced Test Series platform

JOIN

### 12 Month Plan

2018-19 All Test Series

@ Just

# ₹ 499/-

300+ Full Length Tests

- Brilliant Test Analysis
- Excellent Content
- Unmatched Explanations

JOIN NOW

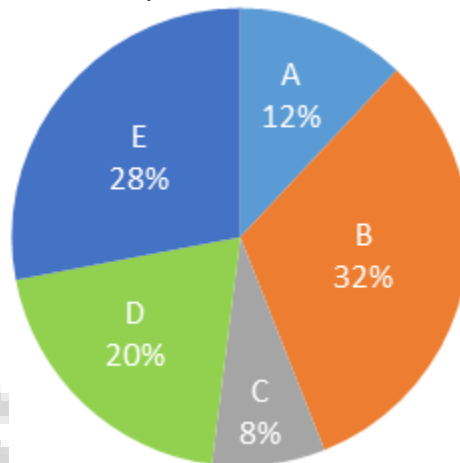
# Date Interpretation Pie Chart Questions for IBPS Clerk Mains, SBI Clerk Mains, IBPS PO Pre, SBI PO Pre, IBPS SO Pre and RRB Scale I Pre Exams.

## DI Pie Chart Quiz 31

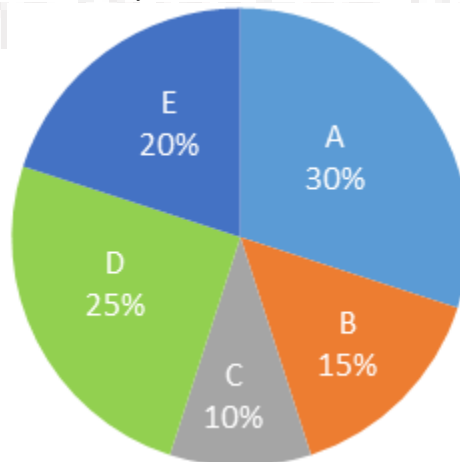
**Directions: Study the following pie charts carefully & answer the questions given below it.**

A tank contains 2400 litres mixture of milk and water in the ratio 2 :1 respectively. The mixture is distributed in five vessels. Percentage wise distribution of quantity of milk and percentage wise distribution of water in five vessels is given in the following pie charts.

Quantity of milk in five vessels



Quantity of water in five vessels



**1. Quantity of milk in vessels A and E together is what percent of quantity of water in vessel D?**

- A. 410%      B. 350%      C. 320%      D. 280%      E. None of these

**2. Find the respective ratio of quantity of water in vessels B and C together and quantity of milk in vessel D.**

A. 5 : 8

B. 4 : 9

C. 8 : 5

D. 9 : 4

E. None of these

**3. Another vessel F also contains a mixture of milk and water. Quantity of milk in vessel F is 20% more than the quantity of milk in vessel C and quantity of water in vessel F is 20% less than the quantity of water in vessel C. Find the respective ratio of milk and water in vessel F.**

A. 5 : 4

B. 12 : 5

C. 4 : 5

D. 5 : 12

E. None of these

**4. Find the sum of quantity of milk in vessels B and D together and quantity of water in vessels D and E together.**

A. 1542 litres

B. 1192 litres

C. 1232 litres

D. 1058 litres

E. None of these

**5. Quantity of mixture in vessel C is what percent more/less than the quantity of mixture in vessel E?**

A. 65.78% more

B. 54.26% less

C. 65.78% less

D. 52.68% more

E. None of these

**6. Find the difference between quantity of mixture in vessel A and vessel D.**

A. 88 litres

B. 46 litres

C. 65 litres

D. 92 litres

E. None of these

**Correct Answers:**

1	2	3	4	5	6
C	A	B	B	C	A

**Explanations:**

**1.**

Total quantity of milk =  $\frac{2}{3} \times 2400 = 1600$  litres.

Total quantity of water =  $2400 - 1600 = 800$  litres.

Quantity of milk in vessels A and E together

$$= \frac{12 + 28}{100} \times 1600 = 640 \text{ litres}$$

Quantity of water in vessel D

$$= \frac{25}{100} \times 800 = 200 \text{ litres}$$

$$\text{Reqd. \%} = \frac{640}{200} \times 100 = 320\%$$

Hence, option C is correct.

**2.**

$$\text{Total quantity of milk} = \frac{2}{3} \times 2400 = 1600 \text{ litres.}$$

$$\text{Total quantity of water} = 2400 - 1600 = 800 \text{ litres.}$$

$$\text{Quantity of water in vessels B and C together} = \frac{15 + 10}{100} \times 800 = 200 \text{ litres}$$

$$\text{Quantity of milk in vessel D} = \frac{20}{100} \times 1600 = 320 \text{ litres}$$

$$\text{Required ratio} = 200 : 320 = 5 : 8$$

Hence, option A is correct.

**3.**

$$\text{Total quantity of milk} = \frac{2}{3} \times 2400 = 1600 \text{ litres.}$$

$$\text{Total quantity of water} = 2400 - 1600 = 800 \text{ litres.}$$

$$\text{Quantity of milk in vessel C} = \frac{8}{100} \times 1600 = 128 \text{ litres}$$

$$\text{Quantity of milk in vessel F} = 128 \times \frac{120}{100} = 153.6 \text{ litres}$$

$$\text{Quantity of water in vessel C} = \frac{10}{100} \times 800 = 80 \text{ litres}$$

$$\text{Quantity of water in vessel F} = 80 \times \frac{80}{100} = 64 \text{ litres}$$

$$\text{Required ratio} = 153.6 : 64 = 12 : 5$$

Hence, option B is correct.

**4.**

$$\text{Total quantity of milk} = \frac{2}{3} \times 2400 = 1600 \text{ litres.}$$

$$\text{Total quantity of water} = 2400 - 1600 = 800 \text{ litres.}$$

$$\text{Quantity of milk in vessels B and D together} = \frac{32 + 20}{100} \times 1600 = 832 \text{ litres}$$

$$\text{Quantity of water in vessels D and E together} = \frac{25 + 20}{100} \times 800 = 360 \text{ litres}$$

$$\text{Required sum} = 832 + 360 = 1192 \text{ litres.}$$

Hence, option B is correct.

5.

$$\text{Total quantity of milk} = \frac{2}{3} \times 2400 = 1600 \text{ litres.}$$

$$\text{Total quantity of water} = 2400 - 1600 = 800 \text{ litres.}$$

$$\text{Quantity of milk in vessel C} = \frac{8}{100} \times 1600 = 128 \text{ litres}$$

$$\text{Quantity of water in vessel C} = \frac{10}{100} \times 800 = 80 \text{ litres}$$

$$\text{Quantity of mixture in vessel C} = 128 + 80 = 208 \text{ litres}$$

$$\text{Quantity of milk in vessel E} = \frac{28}{100} \times 1600 = 448 \text{ litres}$$

$$\text{Quantity of water in vessel E} = \frac{20}{100} \times 800 = 160 \text{ litres}$$

$$\text{Quantity of mixture in vessel E} = 448 + 160 = 608 \text{ litres}$$

$$\text{Reqd. \%} = \frac{608 - 208}{608} \times 100$$

$$= \frac{400}{608} \times 100 = 65.78\% \text{ less}$$

Hence, option C is correct.

6.

$$\text{Total quantity of milk} = \frac{2}{3} \times 2400 = 1600 \text{ litres.}$$

$$\text{Total quantity of water} = 2400 - 1600 = 800 \text{ litres.}$$

$$\text{Quantity of milk in vessel A} = \frac{12}{100} \times 1600 = 192 \text{ litres}$$

$$\text{Quantity of water in vessel A} = \frac{30}{100} \times 800 = 240 \text{ litres}$$

$$\text{Quantity of mixture in vessel A} = 192 + 240 = 432 \text{ litres}$$

$$\text{Quantity of milk in vessel D} = \frac{20}{100} \times 1600 = 320 \text{ litres}$$


$$\text{Quantity of water in vessel D} = \frac{25}{100} \times 800 = 200 \text{ litres}$$

$$\text{Quantity of mixture in vessel D} = 320 + 200 = 520 \text{ litres}$$

$$\text{Required difference} = 520 - 432 = 88 \text{ litres}$$

Hence, option A is correct.





# SmartKeeda

The Question Bank



# SmartKeeda

The Question Bank

प्रस्तुत करते हैं

## TestZone

भारत की सबसे किफायती टेस्ट सीरीज़

अभी  
जुड़ें

### 12 Month Plan

2018-19 All Test Series

@ Just

# ₹ 499/-

300+ फुल लेन्थ टेस्ट

- श्रेष्ठ विश्लेषण
- उत्कृष्ट विषय सामग्री
- बेजोड़ व्याख्या

अभी जुड़ें