



Friends!

We Used **Smartkeeda** and cracked Bank Exams

बैंक परीक्षाओं के लिए निश्चित रूप से

सर्वश्रेष्ठ मॉक टेस्ट सीरीज



**SOUMYADIP BISWAS**  
IBPS PO 2023



**DHAIRYA GAUR**  
RRB PO 2023



**TIYASA ROY**  
IBPS CLERK & PO 2023



**MD. SHABAN**  
IBSP PO & CLERK 2023



**BHAVANA PADALIYA**  
IBPS CLERK & PO 2023



**KAJOL WADHWANI**  
IBPS PO & CLERK 2023



**ESHU SINGH**  
SBI PO 2023



**SACHIN RAI**  
IBPS PO & CLERK 2023



**SUDHEER JANGID**  
RRB CLERK 2023



**VRINDA AGARWAL**  
SBI PO 2023



**SHREYA MAHENDRA MOON**  
IBPS PO 2023



**ANSH GULATI**  
IBPS PO & CLERK 2023  
SBI PO & RRB CLERK 2023

It's Your Turn Now  
**Take A Free Mock Test**

USE CODE

**FEST24** for 10% OFF

# Direction Sense Questions for SBI Clerk Pre, IBPS Clerk Pre, LIC Asst. Pre and EPFO SSA Pre Exams.

## Direction Sense Quiz 21

**Direction :** Read the given information carefully and answer the questions given beside:

Six children are playing Hide & Seek in a park and were standing at different positions such that P is 9 m towards the north of T. Q is 4 m to the west of O, who is 12m to the east of T. U is 6 m to the south of Q. R is 3 m to the north of O. Then few of them moved and their new positions are denoted by adding ( ` ) to their respective names. P moved 5m towards east. O moved 3 m towards the east. Q moved 5 m towards the north.

**1. What is the shortest distance between T and U?**

- A. 9m                      B. 11m                      C. 10m                      D. 15m                      E. None of these

**2. Find the distance between Q and O`?**

- A. 7m                      B. 5m                      C. 6m                      D. 9m                      E. None of these

**3. Who among the following is in north-east of U?**

- I. P  
II. O  
III. R

- A. Only I                      B. Only II and III                      C. Only I and II                      D. Only III                      E. All of the above

**4. T is in which direction and how much far from O`?**

- A. 12m, West                      B. 15m, East                      C. 10m, North-west                      D. 15m, West                      E. None of these

**5. Find Q is in which direction from P?**

- A. South                      B. South-east                      C. North-west                      D. South-west                      E. None of these

**Correct Answers:**

1	2	3	4	5
C	A	B	D	B

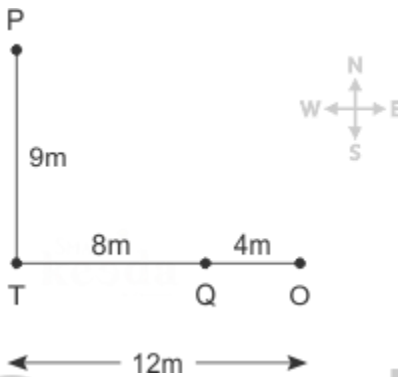
## COMMON EXPLANATION:

### Reference:

Six children are playing Hide & Seek in a park and were standing at different positions such that P is 9m towards the north of T. Q is 4m to the west of O, who is 12m to the east of T.

### Inference:

On the basis of the given hints, following image can be prepared.

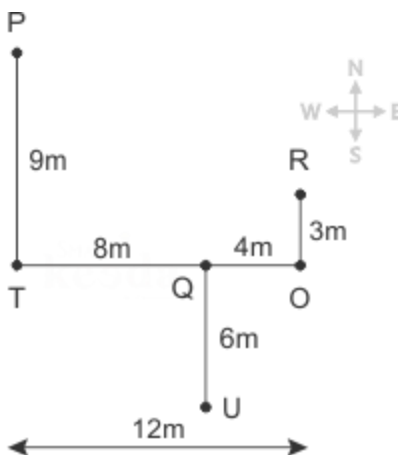


### Reference:

U is 6m to the south of Q. R is 3m to the north of O.

### Inference:

Following image can be prepared as per the given hints.

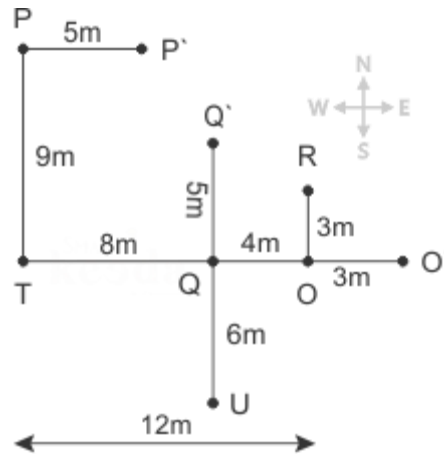


### Reference:

Then few of them moved and their new positions are denoted by adding ` to their respective names. P moved 5m towards east. O moved 3m towards the east. Q moved 5m towards the north.

**Inference:**

The above hints can be used in the following manner.



# Smartkeeda

The Question Bank

**For more PDFs join  
us on Telegram**

[CLICK HERE](#)



SBI | RBI | IBPS | RRB | SSC | NIACL | EPFO | UGC NET | LIC | RAILWAY | CLAT | RJS



## Answers :

1. The shortest distance between T and U using Pythagoras theorem is 10m.

Hence option C is correct.

2. The distance between Q and O` is 7m.

Hence option A is correct.

3. Only O and R are towards the north-east of U.

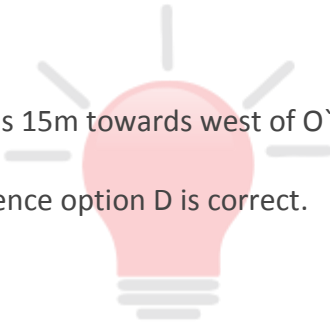
Hence option B is correct.

4. T is 15m towards west of O`.

Hence option D is correct.

5. Q is in south-east of P`.

Hence option B is correct.



**Smartkeeda**  
The Question Bank

**For more PDFs join  
us on Telegram**

[CLICK HERE](#)



SBI | RBI | IBPS | RRB | SSC | NIACL | EPFO | UGC NET | LIC | RAILWAY | CLAT | RJS



**Smartkeeda**

The Question Bank

Presents

# Testzone

India's Leading Test Series Platform

All Banks Exams  
2024-25

12 Months Plan

@Just

Rs. **764**

To get 10% Off use code **FEST24**

- ✓ Brilliant Test Analysis
- ✓ Excellent Content
- ✓ Unmatched Explanation

**Buy Now**

