



Friends!

We Used **Smartkeeda** and cracked Bank Exams

बैंक परीक्षाओं के लिए निश्चित रूप से

सर्वश्रेष्ठ मॉक टेस्ट सीरीज



Soumyadip Biswas
IBPS PO 2023



Dhairya Gaur
RRB PO 2023



Tiya Roy
IBPS Clerk & PO 2023



MD. Shaban
IBPS PO & Clerk 2023



Bhavana Padaliya
IBPS Clerk & PO 2023



Kajol Wadhvani
IBPS PO & Clerk 2023



Eshu Singh
SBI PO 2023



Sachin Rai
IBPS PO & Clerk 2023



Sudheer Jangid
RRB Clerk 2023



Vrinda Agarwal
SBI PO 2023



Shreya Mahendra Moon
IBPS PO 2023



Ansh Gulati
IBPS PO & Clerk 2023
SBI PO & RRB Clerk 2023

It's Your Turn Now
Take A Free Mock Test

USE CODE

FEST24 for 10% OFF

Direction Sense Questions for SBI Clerk Mains and IBPS Clerk Mains Exams.

Direction Sense Quiz 27

Directions: Read the given information carefully and answer the questions given beside.

$P + Q$ states that P is 2 m East Of Q

$P \wedge Q$ states that P is 2 m South Of Q

$P \& Q$ states that P is 4 m East Of Q

$P - Q$ states that P is 2 m West Of Q

P / Q states that P is 2 m North Of Q

1. Read the following information carefully and answer the questions beside-

$A - B \wedge C \& D + E, F + B$

F is in which direction with respect to E?

- A. North B. South C. North West D. South East E. South

2. Read the following information carefully and answer the questions beside-

$A - B \wedge C \& D + E, F + B$

What is the shortest distance between D and B?

- A. $2\sqrt{5}$ m B. $4\sqrt{5}$ m C. $3\sqrt{6}$ m D. 13 m E. None of the above

3. Read the following information carefully and answer the questions beside-

$A - B \wedge C \& D + E, F + B$

A point G is drawn from point F towards 2 m north of F. Then C is in what direction and what distance from G?

A. 2 m North B. 2m South C. 4 m East D. 2 m West E. None of these

4. Read the following information carefully and answer the questions beside-

U & V ^ W- X / Y & Z

What is the area of the square formed by the points V, Y, X and W?

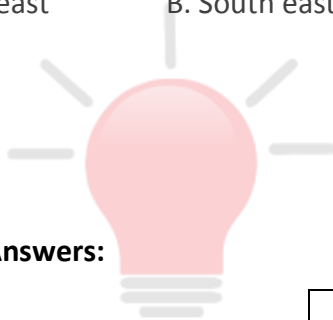
A. 4 m B. 8 m C. 2 m D. 5 m E. None of these

5. Read the following information carefully and answer the questions beside-

U & V ^ W- X / Y & Z

What is the direction of W with respect to U ?

A. South east B. South east C. North east D. North west E. None of the above



Correct Answers:

1	2	3	4	5
D	A	D	A	D

Smartkeeda
The Question Bank



Common explanation :

Reference-

It is stated that

$P + Q$ states that P is 2 m East Of Q

$P \wedge Q$ states that P is 2 m South Of Q

$P \& Q$ states that P is 4 m East Of Q

$P - Q$ states that P is 2 m West Of Q

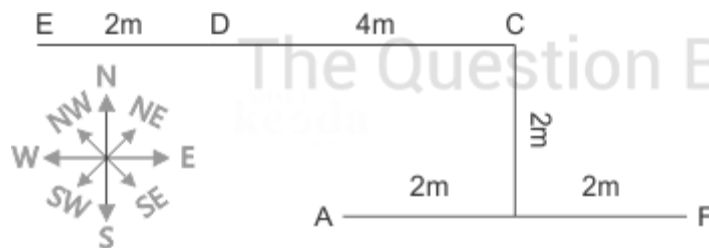
P / Q states that P is 2 m North Of Q

It is also instructed that

$A - B \wedge C \& D + E, F + B$

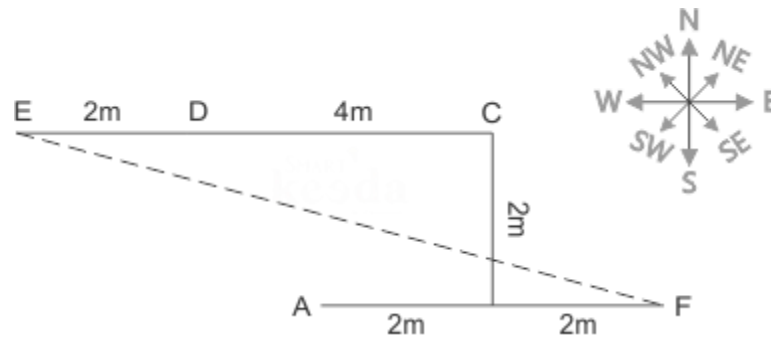
Inference-

So using the above 2 statements, we can draw the diagram as follow-



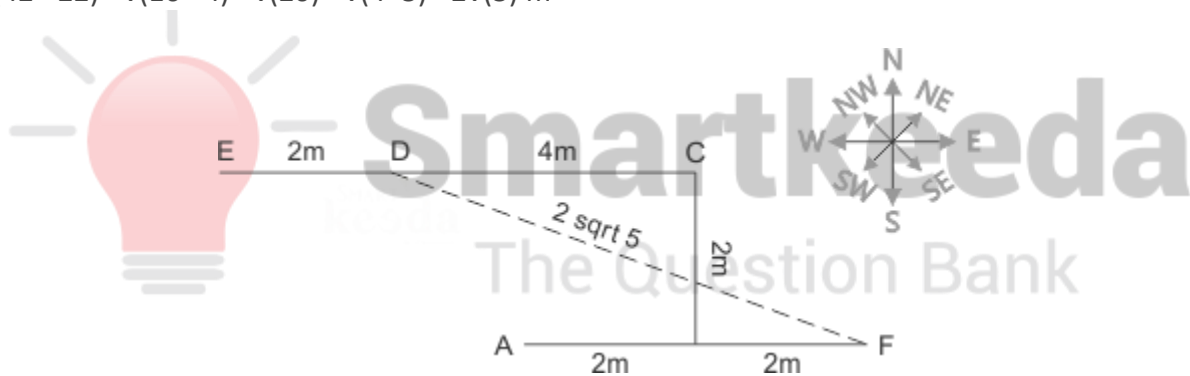
Answers.

1. We can see from the figure that F is in South East of E.



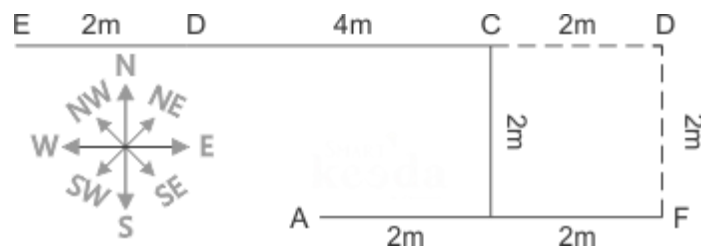
Hence option D is correct.

2. $\sqrt{42 + 22} = \sqrt{16 + 4} = \sqrt{20} = \sqrt{4 \times 5} = 2\sqrt{5} \text{ m}$



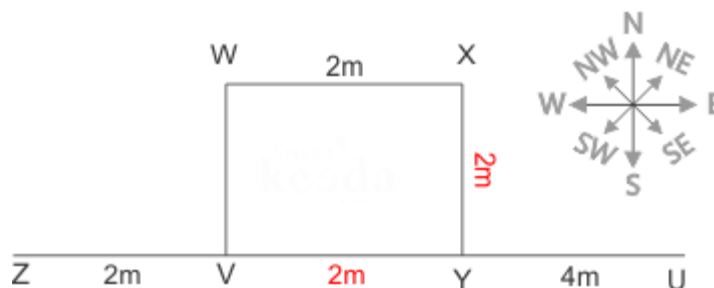
Hence option A is correct.

3. From the figure we can see that C is 2m West of G



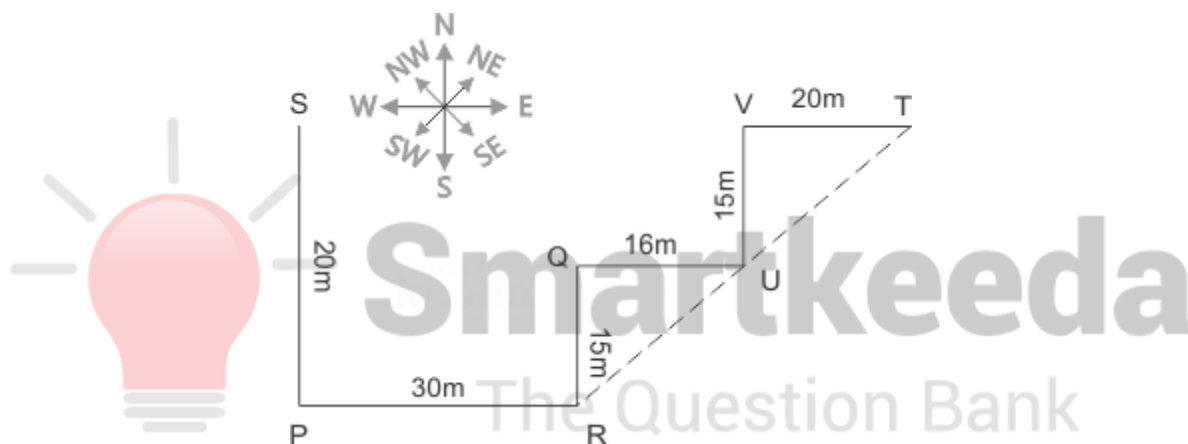
Hence option D is correct

4. We can see that the area of the square formed is $2 \times 2 = 4$ m.



Hence option A is correct.

5. We can see from the figure that R is in south west with respect to T



Hence option B is correct.



Smartkeeda

The Question Bank

Presents

Testzone

India's Leading Test Series Platform

**All Banks Exams
2024-25**

12 Months Plan

@Just

Rs. 764

To get 10% Off use code **FEST24**

- ✓ **Brilliant Test Analysis**
- ✓ **Excellent Content**
- ✓ **Unmatched Explanation**

Buy Now

