



Friends!

We Used **Smartkeeda** and cracked Bank Exams

बैंक परीक्षाओं के लिए निश्चित रूप से

सर्वश्रेष्ठ मॉक टेस्ट सीरीज



Soumyadip Biswas
IBPS PO 2023



Dhairya Gaur
RRB PO 2023



Tiyasa Roy
IBPS Clerk & PO 2023



MD. Shaban
IBSP PO & Clerk 2023



Bhavana Padaliya
IBPS Clerk & PO 2023



Kajol Wadhvani
IBPS PO & Clerk 2023



Eshu Singh
SBI PO 2023



Sachin Rai
IBPS PO & Clerk 2023




Sudheer Jangid
RRB Clerk 2023



Vrinda Agarwal
SBI PO 2023



Shreya Mahendra Moon
IBPS PO 2023



Ansh Gulati
IBPS PO & Clerk 2023
SBI PO & RRB Clerk 2023

It's Your Turn Now
Take A Free Mock Test

USE CODE

FEST24 for 10% OFF

Direction Sense Questions for SBI Clerk Mains, IBPS Clerk Mains, SBI PO Pre and IBPS PO Pre Exams.

Direction Sense Quiz 29

Directions: Read the given information carefully and answer the questions given beside.

Point B is 7 km to the west of Point A. Point C is 12 km to the south of Point E. Point A is 5km to the east of Point C. Point D is 8 km to the north of Point C. Point G is 6 km to the west of Point D. Point H is 14 km to the south of Point G.

1. If Riya is 4 km to the west of Point B then how much distance (shortest) she has to cover and in which direction to reach Point D?

A. 14km, North-West B. 10km, North-East C. 9km, South-west D. 12km, South-east E. None of these

2. If Siya is standing 6 km to the east of Point H and takes 1 hour to complete 9km distance then in what possible time she would reach Point E, if taken the shortest route?

A. 35 minutes B. 60 minutes C. 180 minutes D. 120 minutes E. Can't be determined

3. Point E is how much far (shortest distance) and in which direction from Point A?

A. 15km, North-east B. 14km, North-west C. 13km, North-west D. Data Inadequate E. None of these

4. Which of the following points is/are not towards the south of Point E?

I. Point C

II. Point B

III. Point H

A. Only II B. Only I C. Only II and III D. Only I and II
E. All are towards the south of Point E

5. Which of the following statements is false?

I. Point A is towards the south-east of both the points G and H.

II. Point B is towards the south-west of point E.

III. Points A, B and C form a straight horizontal line.

A. Only I B. Only II C. Only III D. Only I and II E. Only II and III

Correct Answers:

1	2	3	4	5
B	D	C	C	A



Smartkeeda

The Question Bank

www.smartkeeda.com | testzone.smartkeeda.com

SBI | RBI | IBPS | RRB | SSC | NIACL | EPFO | UGC NET | LIC | Railways | CLAT | RJS



[Join us](#)

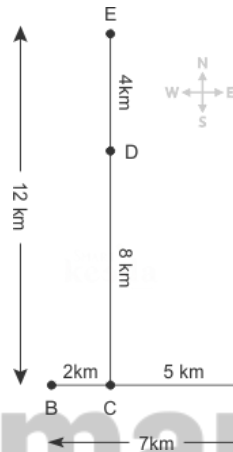
Common explanation:

Reference:

Point B is 7km to the west of Point A.
Point C is 12km to the south of Point E.
Point A is 5km to the east of Point C.
Point D is 8km to the north of Point C.

Inference:

Following image can be prepared with the given hints.

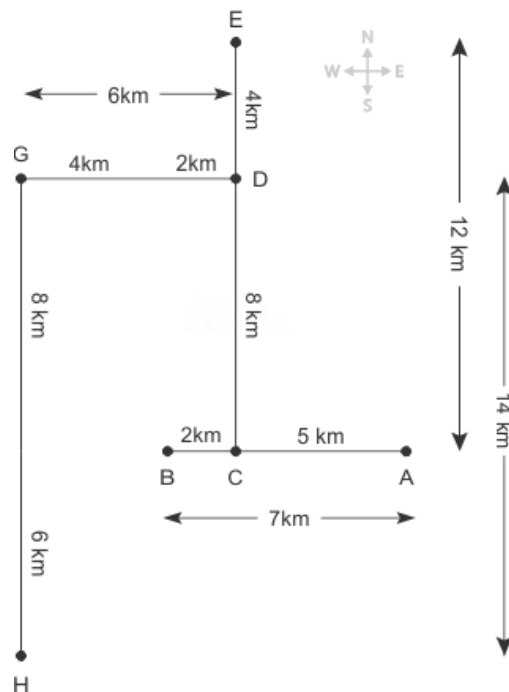


Reference:

Point G is 6km to the west of Point D.
Point H is 14km to the south of Point G.

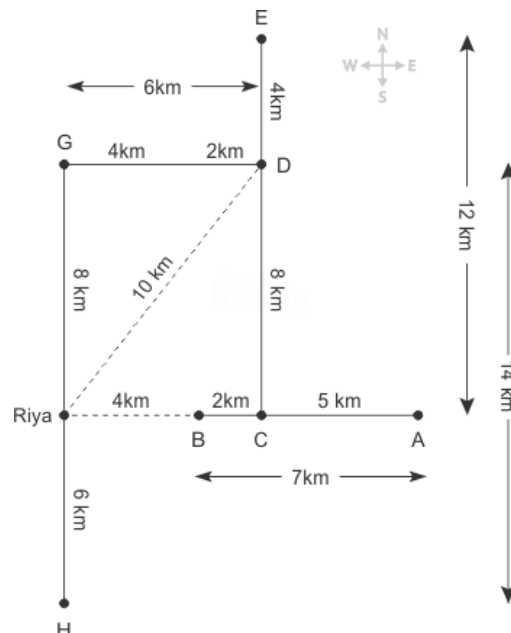
Inference:

The above hints can be used in the following manner.



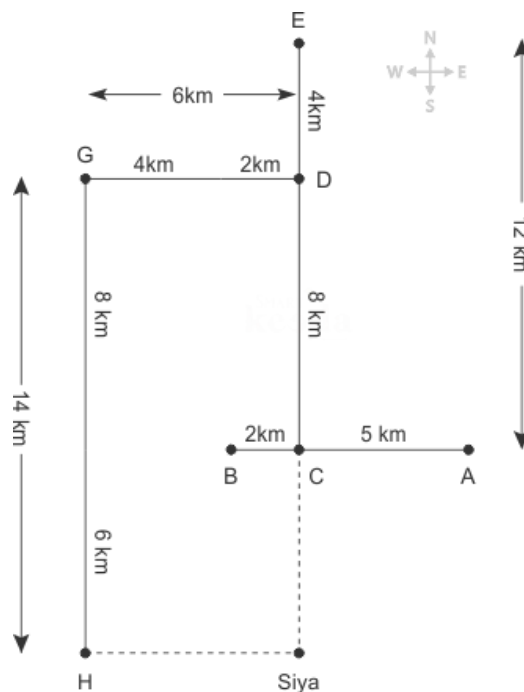
Answers.

1. In such a case Riya has to cover 10 km in North-east direction to reach point D.



Hence option B is correct.

2. In such a case, the minimum distance between Siya and Point E is 18 km, so Siya will take 2 hours or 120 minutes to reach point E.



Hence option D is correct.

3. Point E is 13 km to the North-west of Point A.

Hence option C is correct.

4. Only points B and H are not towards the south of Point E.

Hence option C is correct.

5. Point A is towards the south-east of both the points G and H is a false statement as it is south-east of only the point G not point H.

Hence option A is correct.



Smartkeeda
The Question Bank





Smartkeeda

The Question Bank

Presents

Testzone

India's Leading Test Series Platform

All Banks Exams

2024-25

12 Months Plan

@Just

Rs. **764**

To get 10% Off use code **FEST24**

- ✓ Brilliant Test Analysis
- ✓ Excellent Content
- ✓ Unmatched Explanation

Buy Now

