



Friends!

We Used **Smartkeeda** and cracked Bank Exams

बैंक परीक्षाओं के लिए निश्चित रूप से

सर्वश्रेष्ठ मॉक टेस्ट सीरीज



Soumyadip Biswas
IBPS PO 2023



Dhairya Gaur
RRB PO 2023



Tiyasa Roy
IBPS Clerk & PO 2023



MD. Shaban
IBPS PO & Clerk 2023



Bhavana Padaliya
IBPS Clerk & PO 2023



Kajol Wadhvani
IBPS PO & Clerk 2023



Eshu Singh
SBI PO 2023



Sachin Rai
IBPS PO & Clerk 2023



Sudheer Jangid
RRB Clerk 2023



Vrinda Agarwal
SBI PO 2023



Shreya Mahendra Moon
IBPS PO 2023



Ansh Gulati
IBPS PO & Clerk 2023
SBI PO & RRB Clerk 2023

It's Your Turn Now
Take A Free Mock Test

USE CODE

FEST24 for 10% OFF

Directions sense questions for IBPS CL Mains, IBPS PO Pre, IBPS SO Pre and SBI PO Pre

Directions sense quiz 4

Directions: Study the following questions carefully and answer the questions given below.

Virat goes to Supermarket store to buy fruits. He enters the market, turns to his right, walks 7m and takes oranges. Then, he turns to his left, walks 3m and takes Peach. Again, he turns to his left, which is towards west, walks 7m and takes Papayas. Again, he turns to his right and looks at guavas, which 8m away from him. He takes guavas and moves to his right, walks 7m and stops at the counter for billing.

1. How far is the Papaya stall from the starting point?

- A. 3 m B. 7m C. 8 m
D. 6 m E. None of these

2. What is the shortest distance between the Orange stall and the Billing Counter?

- A. 11 m B. 10 m C. 12 m
D. 7 m E. None of these

3. In which direction is the Papaya stall located with respect to the Orange stall?

- A. North B. South C. Northwest
D. Southeast E. None of these

4. In which direction does Virat move for billing?

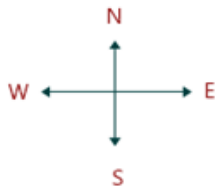
- A. North B. East C. West
D. Can't be determined E. None of these

Correct answers:

1	2	3	4
A	A	C	A

Explanations:

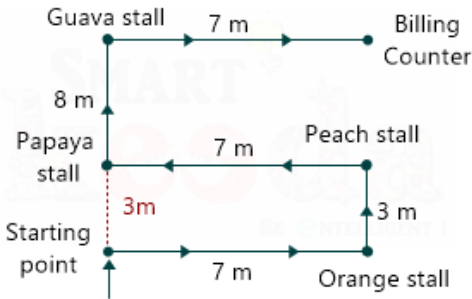
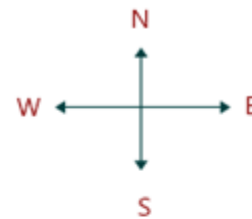
1.



We can clearly observe from the figure that the shortest distance between Orange stall and Billing counter is $3\text{m} + 8\text{m} = 11\text{m}$.

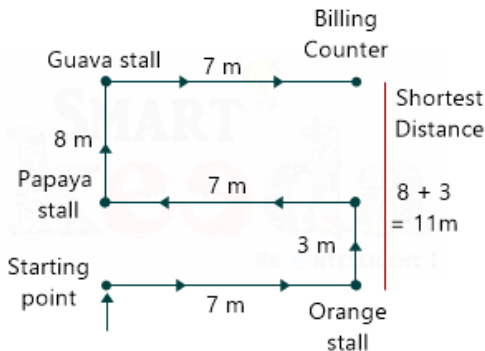
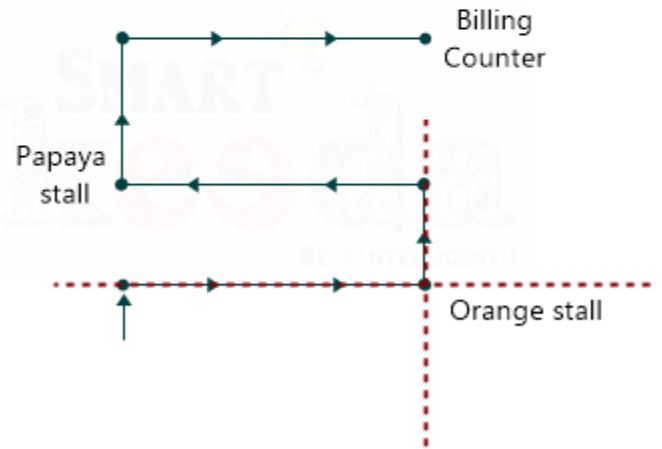
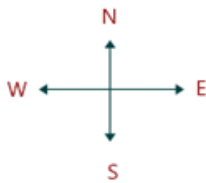
Hence, option A is correct.

3.



Hence, option A is correct.

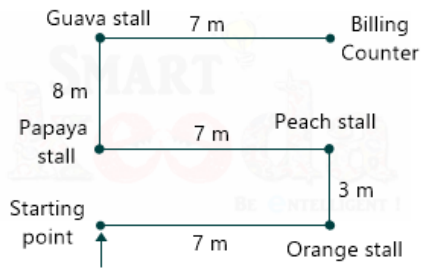
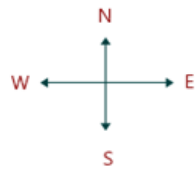
2.



We can clearly observe from the figure that the Papaya stall located in the North-west direction with respect to the Orange stall.

Hence, option C is correct.

4.



We can clearly observe from the figure that Virat is going towards the East direction for billing.

Hence, option B is correct.





Smartkeeda

The Question Bank

Presents

Testzone

India's Leading Test Series Platform

All Banks Exams

2024-25

12 Months Plan

@Just

Rs. **764**

To get 10% Off use code **FEST24**

- ✓ Brilliant Test Analysis
- ✓ Excellent Content
- ✓ Unmatched Explanation

Buy Now

