



Friends!

We Used **Smartkeeda** and cracked Bank Exams

बैंक परीक्षाओं के लिए निश्चित रूप से

सर्वश्रेष्ठ मॉक टेस्ट सीरीज



**SOUMYADIP BISWAS**  
IBPS PO 2023



**DHAIRYA GAUR**  
RRB PO 2023



**TIYASA ROY**  
IBPS CLERK & PO 2023



**MD. SHABAN**  
IBPS PO & CLERK 2023



**BHAVANA PADALIYA**  
IBPS CLERK & PO 2023



**KAJOL WADHWANI**  
IBPS PO & CLERK 2023



**ESHU SINGH**  
SBI PO 2023



**SACHIN RAI**  
IBPS PO & CLERK 2023



**SUDHEER JANGID**  
RRB CLERK 2023



**VRINDA AGARWAL**  
SBI PO 2023



**SHREYA MAHENDRA MOON**  
IBPS PO 2023



**ANSH GULATI**  
IBPS PO & CLERK 2023  
SBI PO & RRB CLERK 2023

It's Your Turn Now  
**Take A Free Mock Test**

USE CODE

**FEST24** for 10% OFF

## Directions Sense Questions for PO Pre, IBPS SO Pre, IBPS Clerk & SBI PO Pre

### Directions Sense Quiz 5

Directions: Study the following questions carefully and answer the questions given below.

1. The distance between N and P is 50 m and that between Q and R is 40m. Q is to the west of R, which is to the east of N at a distance of 70m. P is to the west or northwest or north of Q.

*If Q is to the south of P, what is the distance between P and Q?*

- A. 40 m                      B. 35 m                      C. 80 m                      D. 20 m  
E. None of these

2. The distance between N and P is 50m and that between Q and R is 40m. Q is to the west of R, which is to the east of N at a distance of 70m. P is to the west or northwest or north of Q.

*In which direction is R with respect to P?*

- A. North                      B. East                      C. Southeast                      D. Either 2 or 3  
E. None of these

3. P is 9 m to the south of K. K is 5 m to the east of H. H is 4 m to the north of B. L is 3 m west of B. D is 7 m south of L. G is 8 m east of D.

*If point Z is 5 m to the west of point P, then what is the distance between B and Z?*

- A. 8 m                      B. 9 m                      C. 5 m                      D. 2 m  
E. 6 m

4. P is 9 m to the south of K. K is 5 m to the east of H. H is 4 m to the north of B. L is 3 m west of B. D is 7 m south of L. G is 8 m east of D.

*How far and in which direction is point K from Point G?*

- A. 11 m to the south                      B. 7 m to the north                      C. 11 m to the north  
D. 7 m to the south                      E. 11 m to the west

5. The door of B's house faces east. From the back side of his house, B walks straight 50 m. Again he walks 25m after turning to his left, then he turns to his right and walks 50m. Finally he turns towards north and walks 25m and stops.

*What is the distance between the starting and the end point?*

- A. 80 m                      B. 100 m                      C. 150 m  
D. 120 m                      E. None of these

6. The door of B's house faces east. From the back side of his house, B walks straight 50 m. Again he walks 25m after turning to his left, then he turns to his right and walks 50m. Finally he turns towards north and walks 25m and stops.

*Which directions does B stand in at the end with respect to his house?*

- A. North
- B. South
- C. West
- D. East
- E. None of these

7. Point N is 15 m to the north of P and W is 20m to the east of point P, which is to the north S. R is to the west of P and 15m to the north of Q, which is 18m to the west of S.

*What is the distance between point N and point S?*

- A. 25 m
- B. 30 m
- C. 40 m
- D. 20 m
- E. None of these

8. Point N is 15 m to the north of P and W is 20m to the east of point P, which is to the north S. R is to the west of P and 15m to the north of Q, which is 18m to the west of S.

*Point W is in which direction with respect to point Q?*

- A. Northeast
- B. Southeast
- C. North
- D. West
- E. None of these

9. P is to the North of Q and S is to the east of P, who is to the south of W. T is to the west of P.

*W is in which direction with respect to T?*

- A. North
- B. Northeast
- C. Southwest
- D. West
- E. None of these

10. P is to the North of Q and S is to the east of P, who is to the south of W. T is to the west of P.

*Who among the following is towards south of W and north of Q?*

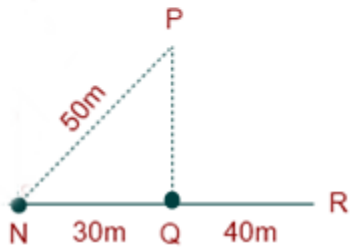
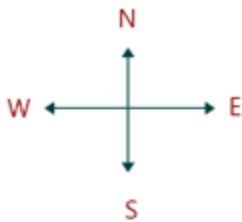
- A. P
- B. T
- C. S
- D. Q
- E. None of these

**Correct Answers:**

1	2	3	4	5	6	7	8	9	10
A	D	C	C	B	C	B	A	B	A

**Explanations:**

1.



**martkeeda**  
The Question Bank

From Formula

$$NP^2 = NQ^2 + PQ^2$$

$$\therefore NP = \sqrt{NP^2 - NQ^2}$$

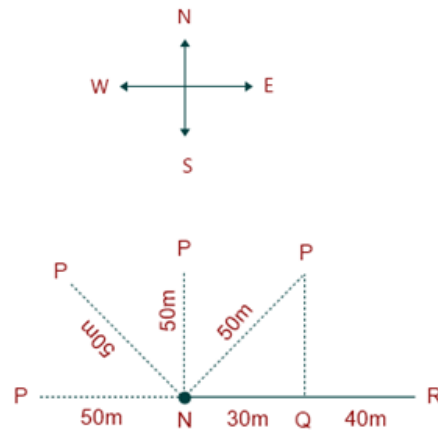
$$= \sqrt{(50)^2 - (30)^2}$$

$$= 2500 - 900$$

$$= 1600 = 40m$$

Hence, option A is correct..

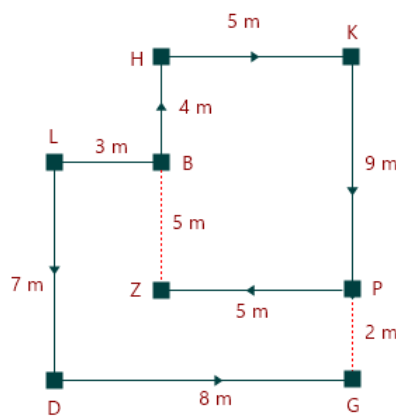
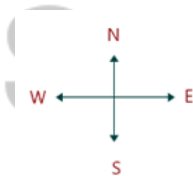
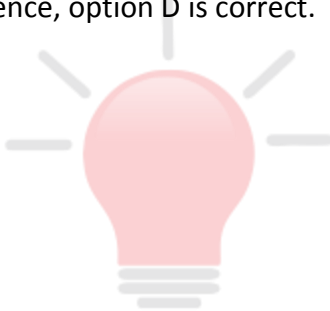
2.



We can clearly observe from the figure that R is in either East or Southeast direction with respect to P.

Hence, option D is correct.

3.

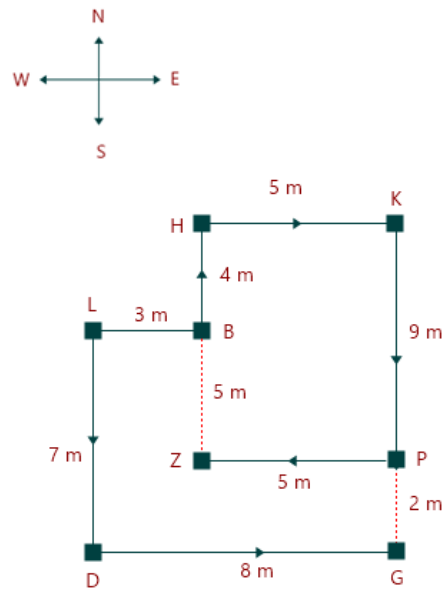


$$HZ = PK = 9 \text{ m}$$

$$\therefore BZ = HZ - BH = 9 - 4 = 5 \text{ m}$$

Hence, option C is correct.

4.

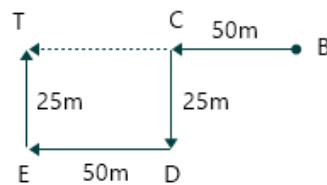
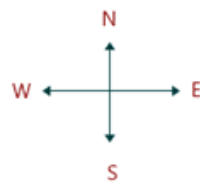


$\therefore KG = 4 + 7 = 11 \text{ m.}$   
Hence, option C is correct.

5.

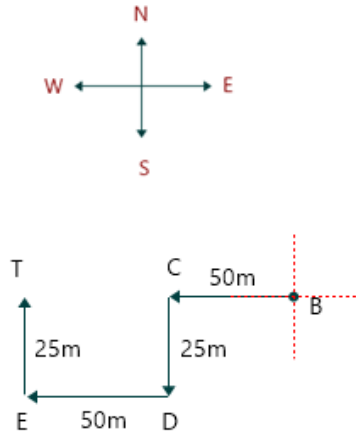


Smartkeeda  
Question Bank



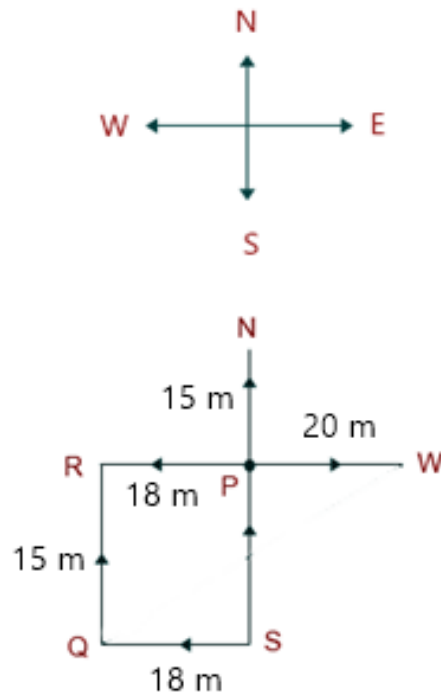
We can clearly observe from figure that the distance between starting point to end point (B to T) is  $50\text{m} + 50\text{m} = 100\text{m}.$   
Hence, option B is correct.

6.



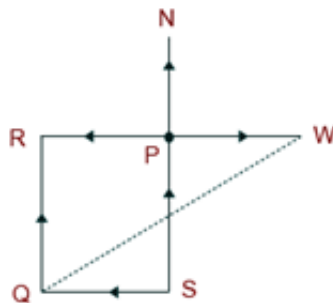
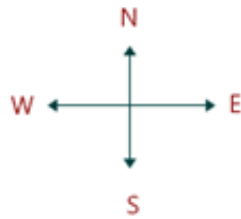
We can clearly observe from the figure that at the end point B stand in the west direction with respect to starting point.  
Hence, option C is correct.

7.



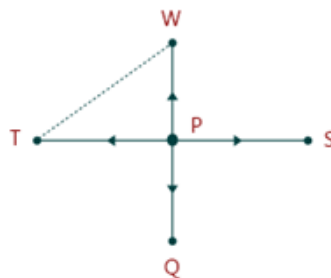
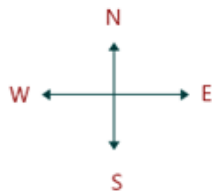
We can clearly observe from the figure that the distance between N and S = NP + PS = 15 + 15 = 30m.  
Hence, option B is correct.

8.



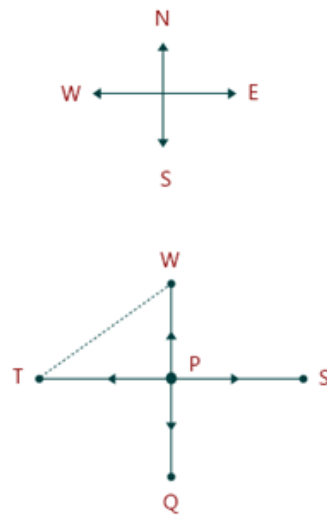
We can clearly observe from the figure that W is in the North-East of point Q.  
Hence, option A is correct.

9.

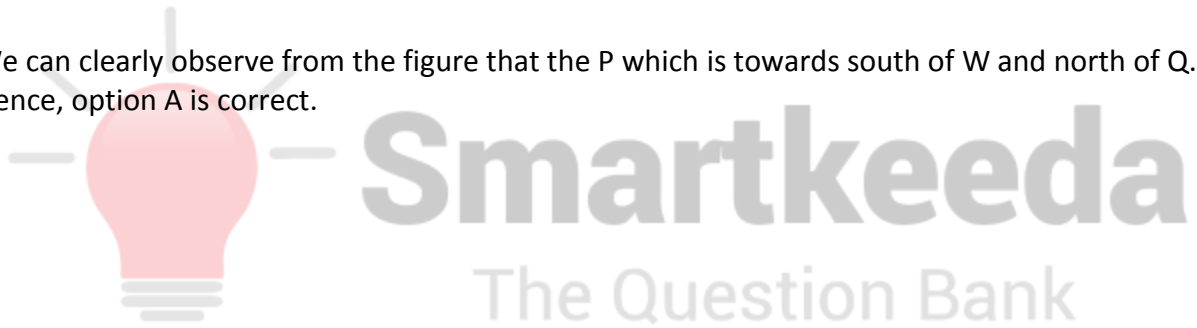


W is in the North-East direction with respect to T.  
Hence, option B is correct.

10.



We can clearly observe from the figure that the P which is towards south of W and north of Q. Hence, option A is correct.





**Smartkeeda**

The Question Bank

*Presents*

# Testzone

India's Leading Test Series Platform

**All Banks Exams**

**2024-25**

**12 Months Plan**

**@Just**

**Rs. 764**

To get 10% Off use code **FEST24**

- ✓ Brilliant Test Analysis
- ✓ Excellent Content
- ✓ Unmatched Explanation

**Buy Now**

